




KERALA PUBLIC SCHOOLS
ACADEMIC YEAR 2020-21
HOME ASSIGNMENT



CLASS :UKG




DATE: 7.05.2020 to 20.05.2020

SUBJECT	ASSIGNMENT
MATHS	<p>Instructions to be followed:</p> <ul style="list-style-type: none">• Children have to say 1-100 orally.• Children should be able to recognize numbers 1-00 and should be able to count different objects around.• According to the weather the child has to draw sunny  , cloudy  or rainy  on top of the date towards the left margin .• Begin with the date on the left margin .• Write the C.W. or H.W. below the date written.• The child has to write in their old maths notebook or maths rough notebook in the correct formation . <p>Note: The parent has to make the child do the work in front of them following each instruction very seriously or else the work will be dirty and will not be as expected. Please let the child complete the work on their own. Parents are requested to supervise their work and help in explaining whatever required but please don't write for them..</p>

Please click on the link given below to learn about the concept of before ,after and between.


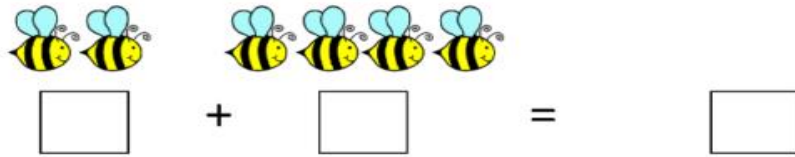
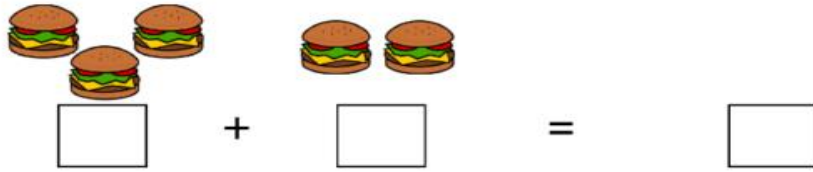

<https://youtu.be/wey-hVI72IU>

I. Write what comes before , between and after.

Before	Between	After
___ 8	1 ___ 3	6 ___
___ 17	20 ___ 22	13 ___
___ 12	8 ___ 10	29 ___
___ 1	14 ___ 16	34 ___
___ 20	31 ___ 33	17 ___
___ 44	19 ___ 21	42 ___
___ 65	11 ___ 13	39 ___
		

© Annie Morratt • The Morratt Girls 2013

II. Picture addition. Count the objects, write the numbers and find the sum.



III. Addition on number line:-



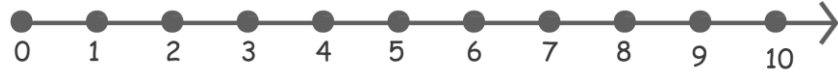
$$6 + 3 = \square$$



$$5 + 2 = \square$$



$$\boxed{3} + \boxed{2} = \boxed{}$$



$$\boxed{7} + \boxed{1} = \boxed{}$$

IV. Add the following:-

$\begin{array}{r} 9 \\ + 2 \\ \hline \end{array}$	$\begin{array}{r} 6 \\ + 3 \\ \hline \end{array}$	$\begin{array}{r} 8 \\ + 4 \\ \hline \end{array}$	$\begin{array}{r} 5 \\ + 5 \\ \hline \end{array}$	$\begin{array}{r} 7 \\ + 6 \\ \hline \end{array}$
$\begin{array}{r} 4 \\ + 7 \\ \hline \end{array}$	$\begin{array}{r} 2 \\ + 8 \\ \hline \end{array}$	$\begin{array}{r} 3 \\ + 9 \\ \hline \end{array}$	$\begin{array}{r} 1 \\ + 8 \\ \hline \end{array}$	$\begin{array}{r} 9 \\ + 8 \\ \hline \end{array}$
$\begin{array}{r} 8 \\ + 8 \\ \hline \end{array}$	$\begin{array}{r} 7 \\ + 8 \\ \hline \end{array}$	$\begin{array}{r} 6 \\ + 8 \\ \hline \end{array}$	$\begin{array}{r} 5 \\ + 6 \\ \hline \end{array}$	$\begin{array}{r} 4 \\ + 5 \\ \hline \end{array}$
$\begin{array}{r} 3 \\ + 4 \\ \hline \end{array}$	$\begin{array}{r} 2 \\ + 3 \\ \hline \end{array}$	$\begin{array}{r} 1 \\ + 2 \\ \hline \end{array}$	$\begin{array}{r} 7 \\ + 5 \\ \hline \end{array}$	$\begin{array}{r} 7 \\ + 4 \\ \hline \end{array}$
$\begin{array}{r} 7 \\ + 3 \\ \hline \end{array}$	$\begin{array}{r} 7 \\ + 2 \\ \hline \end{array}$	$\begin{array}{r} 6 \\ + 5 \\ \hline \end{array}$	$\begin{array}{r} 6 \\ + 4 \\ \hline \end{array}$	$\begin{array}{r} 6 \\ + 3 \\ \hline \end{array}$
$\begin{array}{r} 6 \\ + 2 \\ \hline \end{array}$	$\begin{array}{r} 5 \\ + 4 \\ \hline \end{array}$	$\begin{array}{r} 5 \\ + 3 \\ \hline \end{array}$	$\begin{array}{r} 4 \\ + 3 \\ \hline \end{array}$	$\begin{array}{r} 4 \\ + 2 \\ \hline \end{array}$

Please click on the link given below to learn about the concept of backward counting.

<https://youtu.be/IXx7hyimphE>

V. Fill in the blanks. Count backward and write.

30		28		
25				21
	19		17	
		13		

Please click on the link given below to learn about the concept of Greatest and smallest numbers.

<https://youtu.be/fmY4n6gknxo>

VI. Circle the smallest number:

47	6	20	34
----	---	----	----

32	25	11	8
----	----	----	---

26	19	49	13
----	----	----	----

Please click on the link given below to learn about the concept of Ascending and descending order.

<https://youtu.be/dQNk-Sm26mI>

VII. Arrange in ascending order (Small to big)

2	5	1	6	3

8	1	2	7	6

5	6	1	9	7

8	10	3	5	6

4	7	2	1	10

Please click on the link given below to learn about the concept of putting the correct sign.

https://youtu.be/gdrk_N4oxYI

VIII . Put the correct sign $<$, $>$ or $=$

$6 \bigcirc 10$

$8 \bigcirc 4$

$1 \bigcirc 0$

$7 \bigcirc 9$

$5 \bigcirc 2$

$2 \bigcirc 3$

$3 \bigcirc 3$

$9 \bigcirc 5$

$4 \bigcirc 9$

$10 \bigcirc 4$

$0 \bigcirc 5$

$2 \bigcirc 2$

IX. Circle the greatest number:

33

23

12

5

13

6

29

41

7

32

9

18

X. Arrange in descending order:- (Big to small)

3	6	1	2	4

5	8	3	7	1




2	9	6	3	7

10	1	5	9	4

7	9	8	10	3

ENGLISH

Instructions to be followed:

- Assignment to be done in the old English notebook or in the English rough note book.
- Please ensure that your child says and write.
- Your child has to know the sound of the each letter. **Jolly Phonics**- the sounds of the letters should be thorough. We hope you have downloaded the app in your phone and the child is listening to it frequently. The child should orally be able to tell the initial letter based on the sound made. Do lot of oral drilling on this.
- According to the weather the child has to draw sunny , cloudy  or rainy  on top of the date towards the left margin.
- Begin with the date on the left margin.
- Write the C.W. or H.W. below the date written.
- The child has to write in correct formation. The work should be neatly done in the notebook.
- As we all know drawing needs a lot of practice hence the parents are requested to help their child to learn to draw pictures.

Note: The parent has to make the child do the work in front of them following each instruction very seriously or else the work will be dirty and will not be as expected. Please let the child complete the work on their own. Parents are requested to supervise their work and help in explaining whatever required but please don't write for them.

Please click on the link given below to learn the concept of This/That..


<https://youtu.be/NjoCho-by-8>

I. Fill in the blanks with This / That:

1. _____ is a kite. 

2.  _____ is a lamp.

3. _____ is a fish. 


4. _____ is a jam. 


5.  _____ is a car.

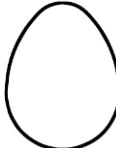
Please click on the link given below to learn the concept of a/an.

<https://youtu.be/MdBvAZdF6ZQ>

II. Fill in the blanks with a/an:

1. _____ umbrella. 

2. _____ cup. 

3. _____ egg. 



4. _____ ink-pot.



5. _____ aeroplane.

Please click on the link given below to learn the concept of one and many.

<https://youtu.be/dtApo5yPaY4>

III. One

Write Many

1. cat

2. hen

3. pen

4. mat

5. ball

Please click on the link given below to learn the concept of These/Those.

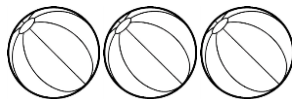
<https://youtu.be/mCbh3GfZmJs>


IV. Fill in the blanks with These / Those:


1. _____ are hats .




2. _____ are balls.



3.  _____ are kites.


4. _____ are balloons. 


5.  _____ are cups.


Please click on the link given below to learn the concept of in/on/under.


<https://youtu.be/XPitAFKckPg>

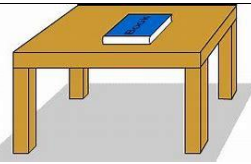
IV. Fill in the blanks with in/on/under:

1. The dog is sleeping _____ the table. 

2. The apple is _____ the box. 

3. The cat is _____ the chair. 

4. The elephant is _____ the box. 



5. The book is _____ the table.

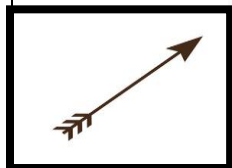
Please click on the link given below to learn about Phonic group.

<https://youtu.be/dsxJPSFnCvw>

V. Colour the beginning sound.




i	s	t	p
---	---	---	---




a	n	p	i
---	---	---	---




p	i	a	n
---	---	---	---



s	i	a	t
---	---	---	---




t	a	p	i
---	---	---	---




p	n	s	i
---	---	---	---


VI. Circle the correct sound that the picture begins with.




m r h




e m i



k h d



r e i



m d c

Instructions: Please help your child to learn (oral):

MY HOME

My home is in _____.

It has a living room, kitchen, bedroom and bathroom.

My home has a beautiful garden around it.

The rooms are bright and airy.

I keep my house neat and clean.

Instructions to be followed:

- Children have to say Colours name, Shapes name and Parts of the body **orally**.
- Make you child learn the Colours name, Shapes name and Parts of the body.
- Children should be able to recognize the different colours , Shapes and Parts of the body.
- Do lot of oral drilling .



Colours name:

- **Yellow**
- **Red**
- **Orange**
- **Blue**
- **Green**
- **Brown**
- **Purple**
- **Black**
- **Pink**
- **White**

Q1. What is the colour of the crow?

Ans. A crow is **black**.

Q2. What is the colour of the sun?

Ans. The sun is **yellow**.

Q3. What is the colour of a brinjal ?

Ans. A brinjal is **purple**.

Q4. What is the colour of an egg?

Ans. An egg is **white**.

Q5. What is the colour of a leaf?

Ans. A leaf is **green**.

Q6. What is the colour of an orange?

Ans. An orange is **orange**.

Q7. What is the colour of an apple?

Ans. An apple is **red**.

Q8. What is the colour of the sky?

Ans. The sky is **blue**.

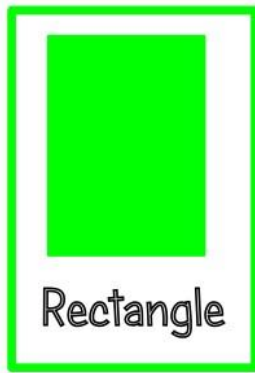



Q9. What is the colour of a lotus?

Ans. A lotus is **pink**.

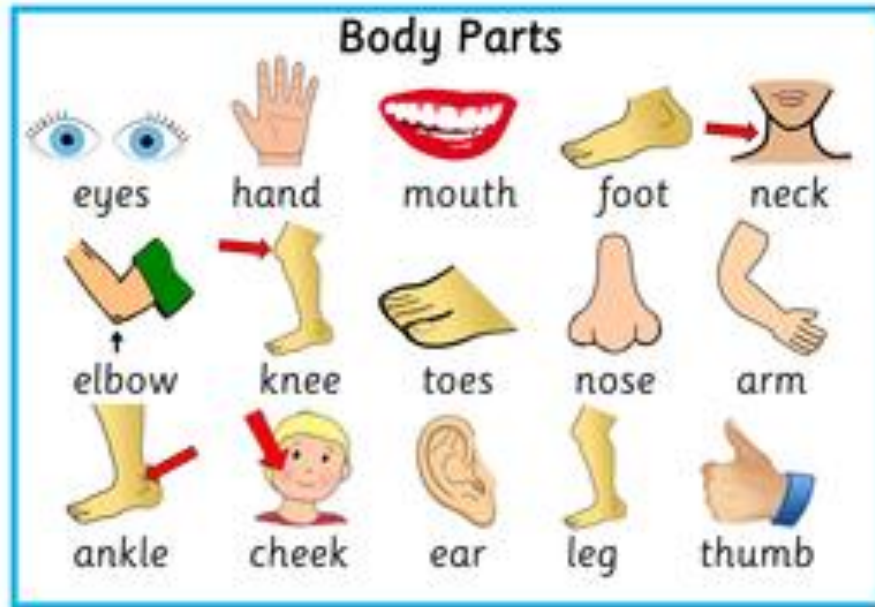
Q10. What is the colour of a chocolate?

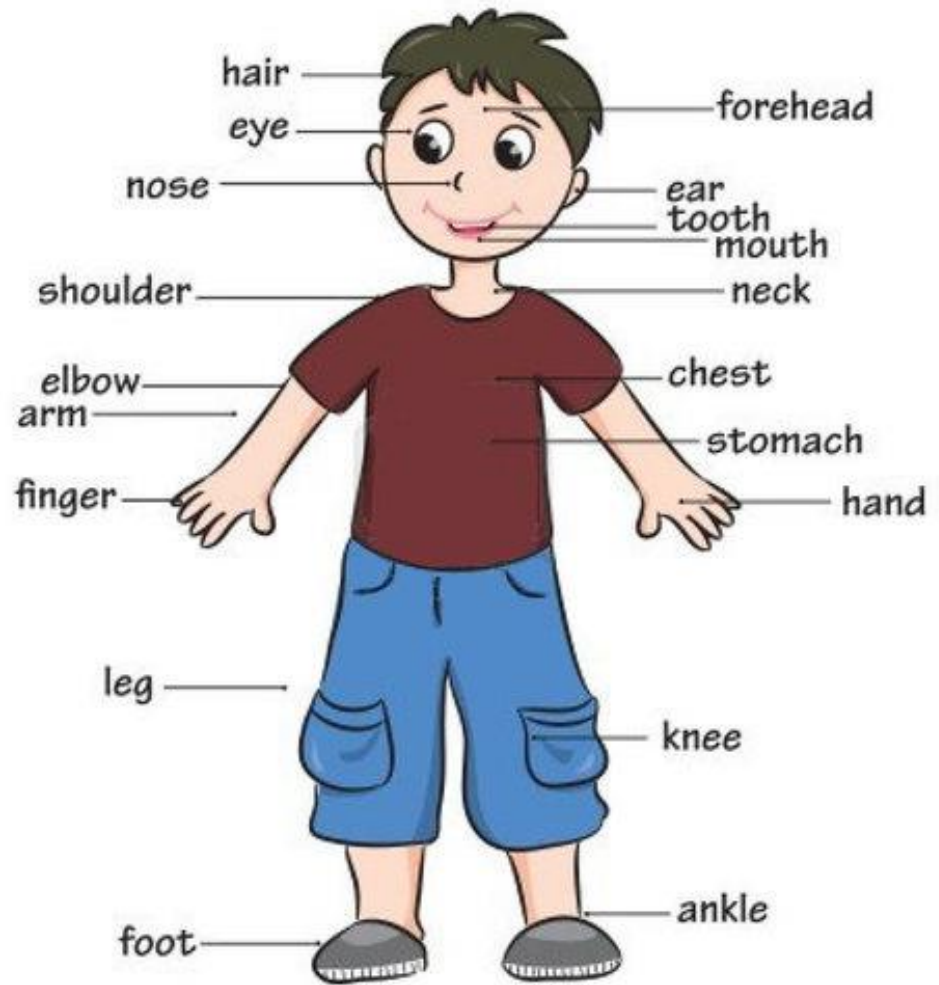
Ans. A chocolate is **brown**.

SHAPES NAME



PARTS OF THE BODY





Learning English with easypacelearning.com

Q1. What do you do with your eyes?

Ans. I see with my eyes.

Q2. What do you do with your ears?

Ans. I hear with my ears.

Q3. What do you do with your mouth?

Ans.. I eat with my mouth.

Q4. What do you do with your nose?

Ans. I smell with my nose.

Q5. What do you do with your hands?

Ans. I work with my hands.

Q6. What do you do with your legs?

Ans. I walk with my legs.

